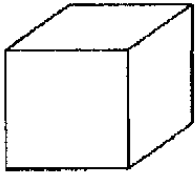


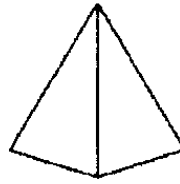
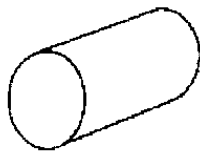
Nome _____ Data ___/___/___

1. Faz corresponder cada sólido geométrico à etiqueta que tem o seu nome.



Cilindro

Cone



Cubo

Pirâmide

2. Escreve o nome do sólido geométrico que cada objecto faz lembrar.



